



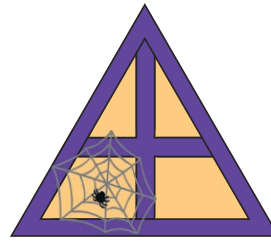
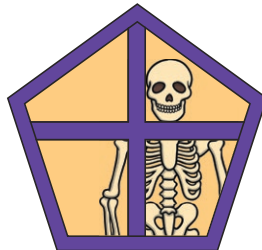
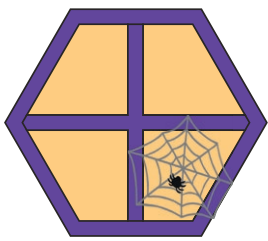
Spooky Sides and Villainous Vertices

I can name 2D shapes and identify their properties.



Write the shape names in the boxes underneath each window. Some boxes will have more than one shape.

1 side	2 sides	3 sides	4 sides	5 or more sides
--------	---------	---------	---------	-----------------





h_xa_o_

_i__le

_ent_g__

t_ia_gl_

re_t__g__



_qu_r_

_ct_g_n

rh_m__s

_val

_ite

0 vertices	3 vertices	4 vertices	5 vertices	6 or more vertices
------------	------------	------------	------------	--------------------



Spooky Sides and Villainous Vertices

I can name 2D shapes and identify their properties.



Write the shape names in the boxes underneath each window. Some boxes will have more than one shape.

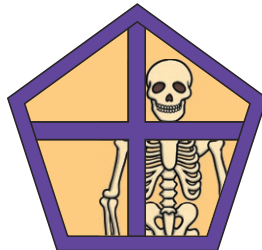
1 side	2 sides	3 sides	4 sides	5 or more sides



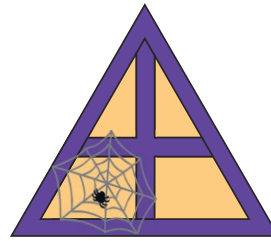
__xa_o_



_i__le




_en__g__



_r__g__



_e_t_g__




__u_r_



_c__g_n



_h_m__s



_v_l



_i_e

0 vertices	3 vertices	4 vertices	5 vertices	6 or more vertices





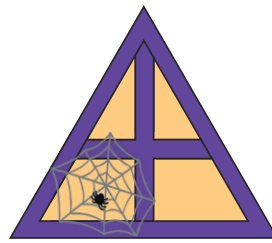
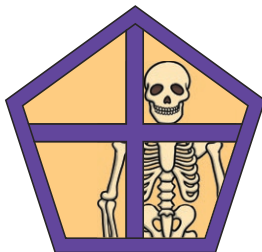
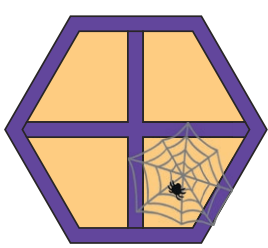
Spooky Sides and Villainous Vertices

I can name 2D shapes and identify their properties.



Write the shape names in the boxes underneath each window. Some boxes will have more than one shape.

1 side	2 sides	3 sides	4 sides	5 or more sides
--------	---------	---------	---------	-----------------

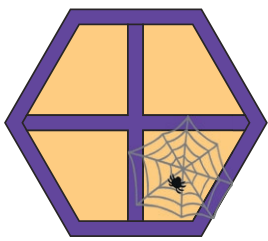


0 vertices	3 vertices	4 vertices	5 vertices	6 or more vertices
------------	------------	------------	------------	--------------------



Answers

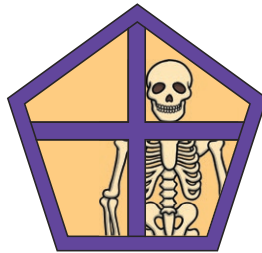
1 side circle oval	2 sides	3 sides triangle	4 sides square rectangle kite rhombus	5 or more sides pentagon hexagon octagon
---------------------------------	----------------	----------------------------	--	--



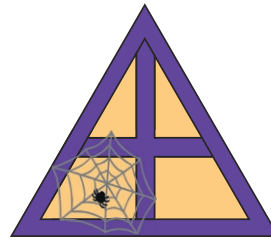
hexagon



circle




pentagon



triangle



rectangle




square



octagon



rhombus



oval



kite

0 vertices circle oval	3 vertices triangle	4 vertices square rectangle rhombus kite	5 vertices pentagon	6 or more vertices hexagon octagon
-------------------------------------	-------------------------------	---	-------------------------------	---